

MOCK TEST – Grade 2

Total Marks: 100

Time Duration: 1 hour

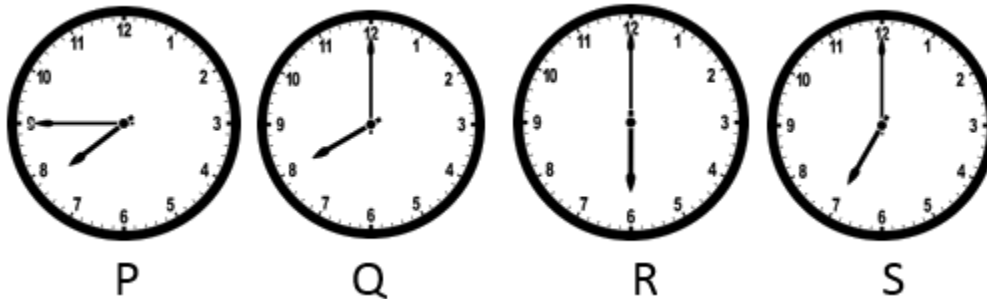
Section: Logical Reasoning

Question 1: Which of the following will be the next term in the given series?

2, 4, 6, 8, 10, 12,

- a) 16
- b) 14
- c) 18
- d) 15

Question 2: Which clock shows one hour less than 7 PM.



- (a) P
- (b) Q
- (c) R
- (d) S



Question 3: If today is Thursday, then what day was just before yesterday?

- (a) Monday
- (b) Wednesday

- (c) Tuesday
- (d) Friday

Question 4: Which alphabet comes in the middle of the following given word?

EDUCATION

- (a) A
- (b) T
- (c) U
- (d) I

Question 5: Ram is taller than Shyam, Shyam is smaller than Mohit. Who is smallest among them?

- (a) Ram
- (b) Shyam
- (c) Mohit
- (d) None of these

Section: Mental Math

Question 6: Which of the following number is in the standard form for : $500 + 90 + 1$

- (a) 519
- (b) 591
- (c) 590
- (d) 509



Question 7: What is the value of 7 in 798?

- (a) 7
- (b) 70
- (c) 700
- (d) 7000

Question 8: Which of the following shows eight hundred fifty-six?

- (a) 865
- (b) 806
- (c) 866
- (d) 856

Question 9: How many corners does a triangle have?

- (a) 3
- (b) 4
- (c) 5
- (d) 6

Question 10: I am a three-digit number, I have a 5 in the ones place, a 3 in the tens place and 7 in the hundreds place. Identify me.

- (a) 537
- (b) 735
- (c) 357
- (d) 753

Question 11: What is 5 more than 35?

- (a) 40
- (b) 30
- (c) 25
- (d) 45

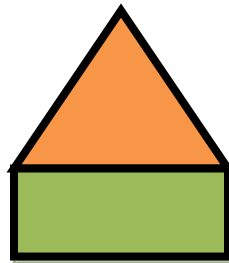
Question 12: 30 people are on a train. 5 more people get in and 2 get down in a station. How many people are there on the train?

- (a) 33
- (b) 31
- (c) 28
- (d) 27

Question 13: 2 kilograms is equals to how many grams?

- (a) 200 grams
- (b) 2000 grams
- (c) 20 grams
- (d) 250 grams

Question 14: Which two shapes is this diagram made up of?



- (a) Triangle and Rectangle
- (b) Square and Triangle
- (c) Pentagon and Triangle
- (d) Square and Hexagon

Question 15: Which statement is correct?

- (a) Rectangle has 4 equal sides
- (b) Triangle has 4 corners
- (c) Square has 4 equal sides
- (d) Circle has 2 corners



Section: Math

Question 16: Oliver has 8 pencils. Daniella has 14 pencils. If Oliver and Daniella put their pencils together, how many pencils they have?

- (a) 21
- (b) 20
- (c) 22
- (d) 24

Question 17: Rohit has one pet. It is a dog. Rohit's dog has 6 puppies. He gives 2 puppies to his aunt, 1 puppy to his best friend. How many puppies does Rohit have now?

- (a) 3 puppies
- (b) 1 puppy
- (c) 2 puppies
- (d) 4 puppies

Question 18: Sachin bought a sandwich of Rs. 85. He paid Rs. 100 to the shopkeeper. How much change Sachin will get in return?

- (a) Rs. 15
- (b) Rs. 20
- (c) Rs. 35
- (d) Rs. 25

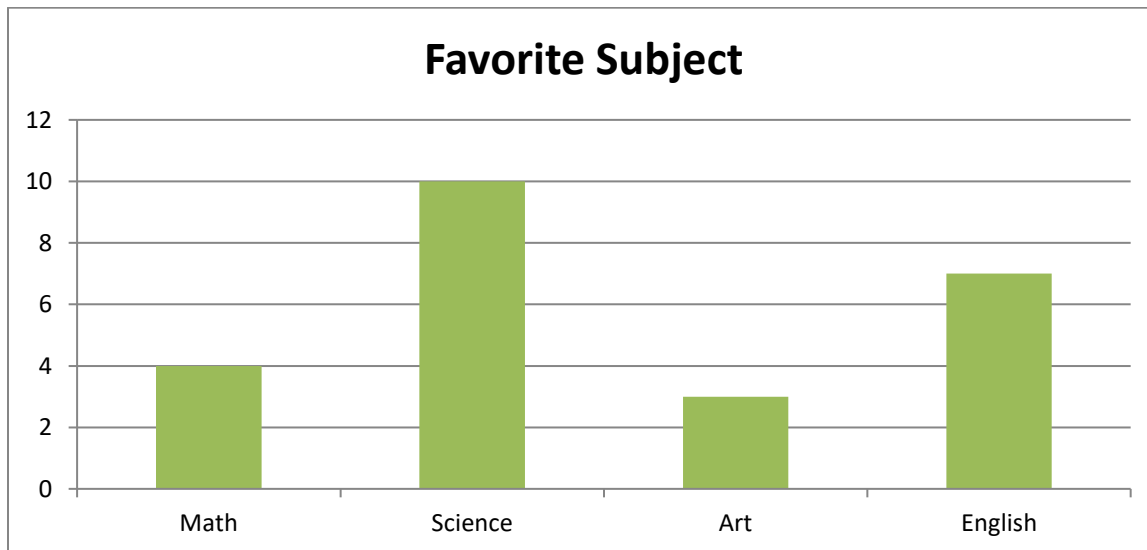
Question 19: Study the given picture and find the total number of pancakes.

Pancakes	
Cookies	
Cupcakes	

Each = 3 items

- (a) 6 pancakes
- (b) 9 pancakes
- (c) 12 pancakes
- (d) 2 pancakes

Question 20: See the bar chart to answer this question. How many students choose science and math as their favorite subject?



- (a) 13

- (b) 10
- (c) 12
- (d) 14

Question 21: What is the weight of the apples?



- (a) 3 kg
- (b) 6 kg
- (c) 2 kg
- (d) 1 kg

Question 22: Study the given picture, find the number of children in cricket team.

Cricket	
Basketball	
Badminton	

Each = 2 Children

- (a) 10 children
- (b) 6 children
- (c) 5 children
- (d) 12 children

Question 23: A shopkeeper has 12 bags of rice each having weight 2 kg. what is the total weight of the rice bags?


- (a) 22 kg
- (b) 26 kg
- (c) 28 kg
- (d) 24 kg

Question 24: Which container can hold water more than a bucket?




- (a) Barrel
- (b) Bottle
- (c) Vase
- (d) None of these

Question 25: How many squares are there in the figure?



- (a) 5
- (b) 4
- (c) 6
- (d) 8

Question 26: How many triangles are used to make this pattern?

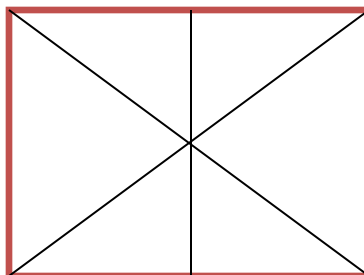


- (a) 1
- (b) 2
- (c) 3
- (d) 4

Question 27: Which is the smallest two-digit number in the options given below?

- (a) 86
- (b) 89
- (c) 79
- (d) 88

Question 28: How many triangles are there in the given shape?



- (a) 9
- (b) 7
- (c) 10
- (d) 8

Question 29: From the given table, how many people choose Jaipur and Mumbai?

City	Number of People
Kolkata	12
Jaipur	24
Mumbai	15
Chennai	34

- (a) 39 People
- (b) 27 People
- (c) 49 People
- (d) 58 People

Question 30: Which is the largest three-digit number in the options given below?

- (a) 564
- (b) 566
- (c) 554
- (d) 574

Section: Achiever section

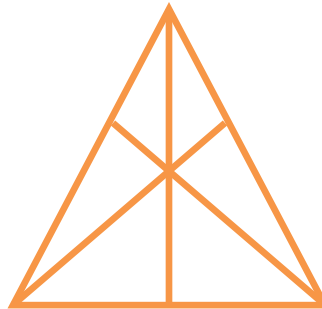
Question 31: Write the numeral for nine hundred and ninety-eight.

- (a) 899
- (b) 999
- (c) 998
- (d) 898

Question 32: There are 456 toys in a shop. 241 toys are being sold. How many toys are there in the shop?

- (a) 231
- (b) 215
- (c) 283
- (d) 321

Question 33: How many triangles are there in the figure given below?



- (a) 10
- (b) 12
- (c) 11
- (d) 13

Question 34: Which two numbers come in between 567 and 617?

- (a) 570 and 601
- (b) 566 and 618
- (c) 514 and 563
- (d) 620 and 643

Question 35: Which options shows the 899 in expanded form?

- (a) $800 + 90 + 6$
- (b) $80 + 90 + 9$
- (c) $800 + 9 + 95$
- (d) $800 + 90 + 9$



Question 36: Which is the correct number to write in the box?

$$400 + \square + 7 = 457$$

- (a) 55
- (b) 56
- (c) 54
- (d) 50

Question 37: Which is the correct symbol to compare the numbers given below?

$$999 \square 101$$

- (a) <
- (b) >
- (c) =
- (d) None of these

Question 38: Complete the number series given

102, 202, 302, 402,

- (a) 602
- (b) 502
- (c) 702
- (d) 802


Question 39: From the given pictograph, how many students are there in long jump and 100 meters race?

100 meters race	★ ★
Long jump	★ ★ ★ ★
200 meters race	★ ★ ★
Lemon race	★ ★ ★ ★ ★

Each ★ = 4 students

- (a) 24
- (b) 28
- (c) 32
- (d) 26

Question 40: What is the weight of an apple from the figure given below?



- (a) 300 g
- (b) 250 g
- (c) 150 g
- (d) 350 g

Answers

1. (b) 14
2. (c) R
3. (c) Tuesday
4. (a) A
5. (b) Shyam
6. (b) 591
7. (c) 700
8. (d) 856
9. (a) 3
10. (b) 735
11. (a) 40
12. (a) 33
13. (b) 2000 grams
14. (a) Triangle and rectangle
15. (c) Square has 4 equal sides
16. (c) 22
17. (a) 3 puppies
18. (a) Rs. 15
19. (a) 6 pancakes
20. (d) 14
21. (b) 6 kg
22. (a) 10 children
23. (d) 24 kg
24. (a) Barrel
25. (a) 5
26. (d) 4
27. (c) 79
28. (d) 8
29. (a) 39 People
30. (d) 574
31. (c) 998
32. (b) 215
33. (a) 10
34. (a) 570 and 601
35. (d)
36. (d) 50
37. (b) >
38. (b) 502



39. (a) 24

40. (a) 300 g